

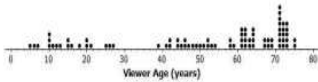
Module 2 Lesson 2 11/28/17 Opening Exercise:

Copy the following notes and Label the Following Graphs:

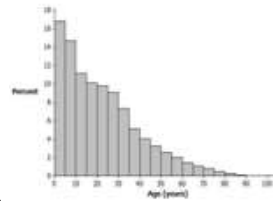
Mean- Add up the values in the data set and then divide by the number of values that you added

Median- list the values of the data set in numerical order and identify which value appears in the middle of the list.

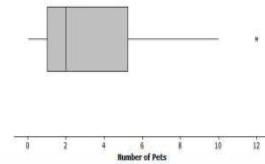
Dot Plots- is a statistical chart consisting of data points plotted on a fairly simple scale, typically using filled in circles.



1.



2.



3.
