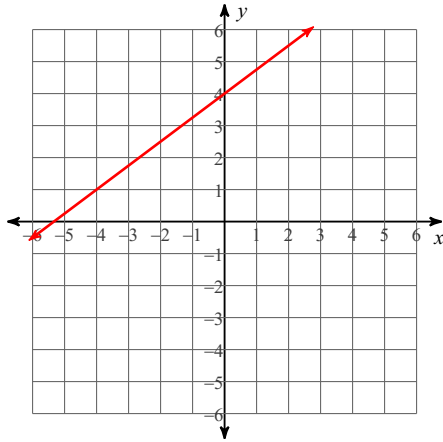


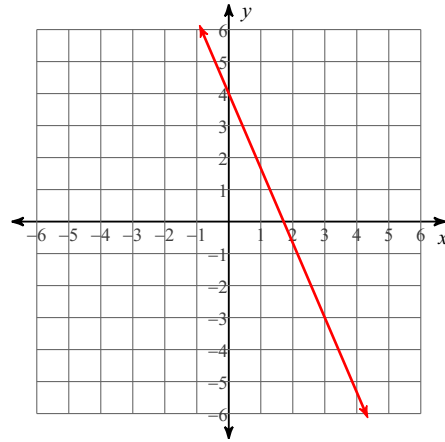
# Graphing Linear Equations - Easy

Sketch the graph of each line.

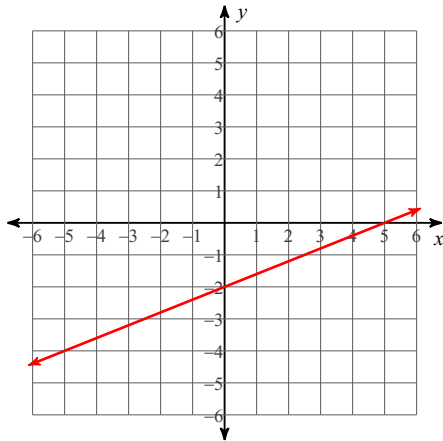
1)  $y = \frac{3}{4}x + 4$



2)  $y = -\frac{7}{3}x + 4$



3)  $y = \frac{2}{5}x - 2$



4)  $y = -x + 4$

