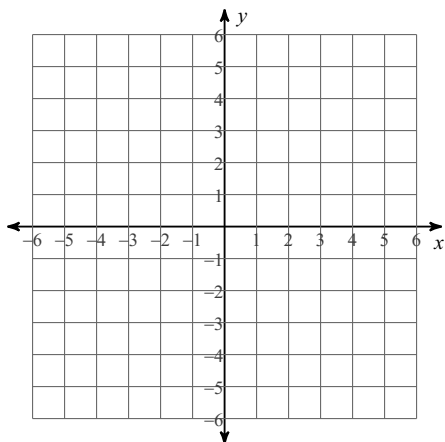


Graphing Linear Equations - Easy

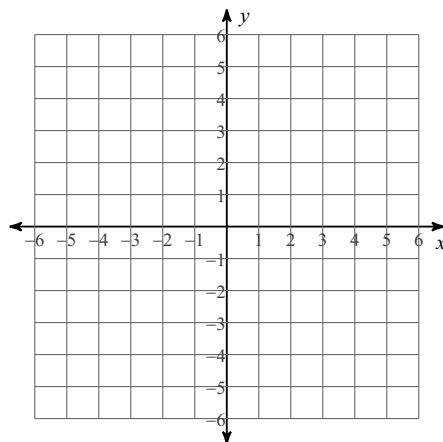
Date _____ Period _____

Sketch the graph of each line.

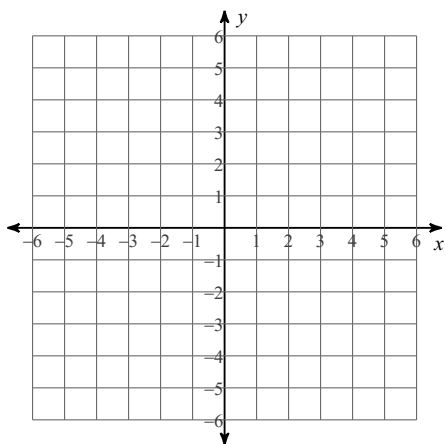
1) $y = \frac{3}{4}x + 4$



2) $y = -\frac{7}{3}x + 4$



3) $y = \frac{2}{5}x - 2$



4) $y = -x + 4$

