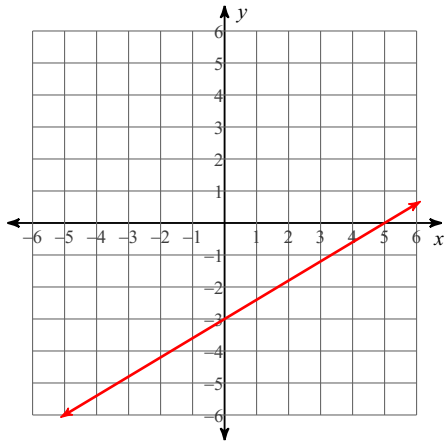


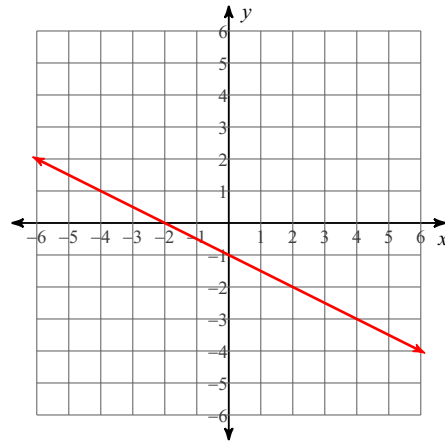
Graphing Linear Equations - Challenging

Sketch the graph of each line.

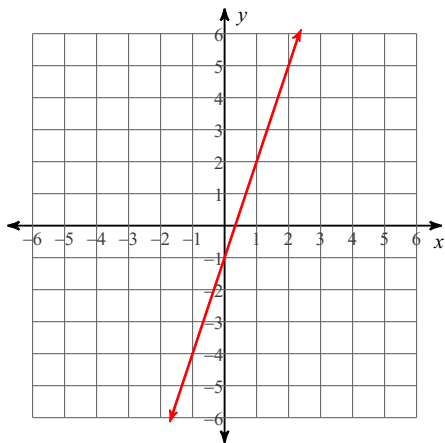
1) $-5y = -3x + 15$



2) $6 = -3x - 6y$



3) $-3y = -9x + 3$



4) $-15 = -3y - 4x$

