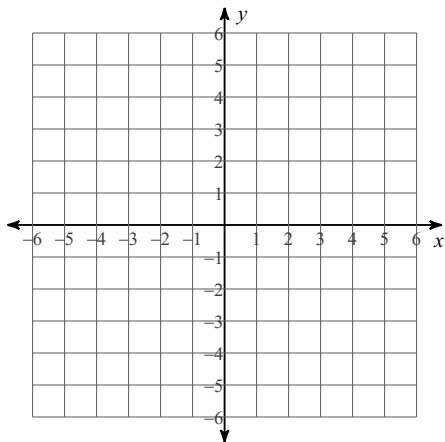


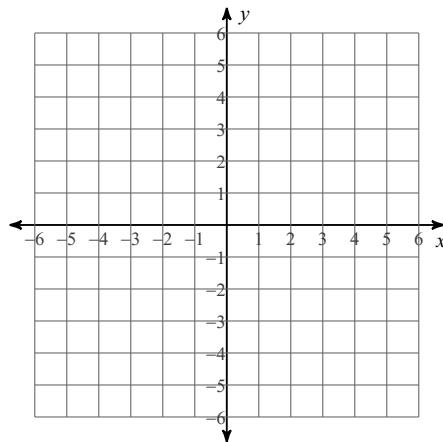
## Graphing Linear Equations - Challenging

**Sketch the graph of each line.**

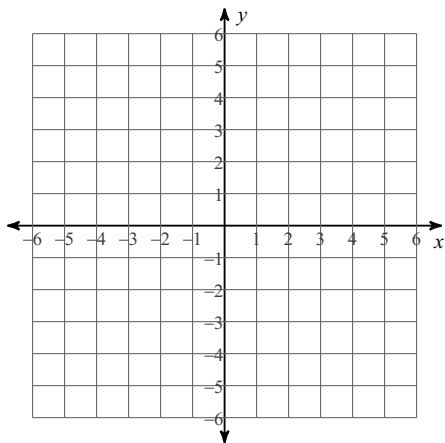
1)  $-5y = -3x + 15$



2)  $6 = -3x - 6y$



3)  $-3y = -9x + 3$



4)  $-15 = -3y - 4x$

